

Name:



Date:

total marks



Science Assessment Living Things and their Habitats

1. Each of these pictures shows something that is either **alive**, **used to be alive** or something that has **never lived**. Draw lines to join them to the correct box.



alive

used to be alive

never lived

2. Each of these statements describes something that is either **alive** or **not alive**. Write either **alive** or **not alive** next to each statement:

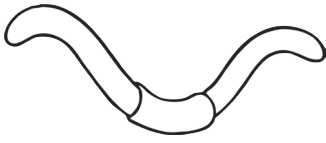
- It does not need food. _____
- It can have babies (reproduce). _____
- It can grow and move. _____

9 marks

3 marks

Total for this page


3. Match each animal to the most suitable habitat.




forest



underground



river



ocean



rainforest

4. What is it called when an animal is the same colour as its habitat?

5. Why would an animal want to blend in with its surroundings?


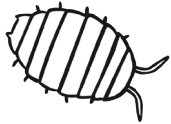
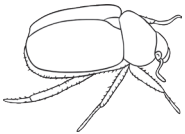
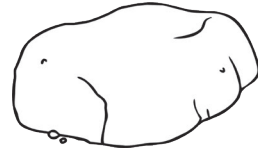

5 marks

1 mark

1 mark

Total for this page

6. Put these **minibeasts** into the **microhabitat** you would be **most likely** to find them. Draw a line between them.



7. Complete this food chain.

1.

2.

3.



6 marks

1 mark

Total for this page